

Name _____

Roll no: _____

Q1. Fill in the blank:-

1. Alphabet keys are used to type letters.
2. The bold, italics, underline options are under the Home tab.
3. The font is the particular style in which you type the text.
4. Microsoft office Word is the most popular typing program used all over the world.
5. A word processor is an application software.
6. Caps Lock key is used to type a capital letters.

Q2. True/False:-


- | | |
|---|-------|
| 1. Windows is word processing software. | False |
| 2. The status bar is the top most bar in the MS Word 2010. | False |
| 3. If you keep on typing the text, it will wrap itself at the right end of the ruler. | True |
| 4. Selecting the text means deleting it. | False |
| 5. The Ribbon contains two parts tabs and groups. | True |
| 6. You cannot print your document in MS Word. | False |
| 7. Ruler keeps track of the page margins, height and width of the page. | True |
| 8. Enter key does not move the cursor to the beginning of the next line. | False |
| 9. Backstage view has three panes. | True |
| 10. Arrow keys are used to control the movement of the cursor on the monitor. | True |

Q3. One word:-

- | | |
|--|------------------|
| 1. What do you type in MS Word document? | Letters, stories |
| 2. Which is the top most bar of the MS Word 2010? | Title Bar |
| 3. Which row has Home keys on the keyboard? | Middle row |
| 4. Which tab will you click to edit your text font properties? | Home tab |
| 5. What is the colour of File tab? | Blue |
| 6. Which key is the longest key on the keyboard? | Space Bar key |
| 7. Who is the developer of Microsoft? | Bill Gates |
| 8. Name other word processing software. | Notepad, WordPad |
| 9. Which letters are used as tools in Word document? | B, I and U |
| 10. Which is the largest white space area to type the text? | Document area |

Q4. Matching:-

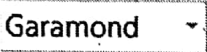









1. Save button
2. Move the selected text
3. To roll back your last actions
4. To Copy the text
5. To paste the text



Q5. Keyboard Shortcut of MS. Word:-

- | | |
|---------------------------------|--------------|
| 1. Select the entire document | Ctrl+A |
| 2. Select a line till end | Shift + End |
| 3. Select a line till beginning | Shift + Home |
| 4. Save a document | Ctrl+S |
| 5. Print a document | Ctrl+P |
| 6. Close a document | Ctrl+W |
| 7. Underline the text | Ctrl+U |
| 8. Create a new document | Ctrl+N |
| 9. Make the text bold | Ctrl+B |
| 10. Open an existing document | Ctrl+O |

Q6. Draw and label the following tools:-

- | | |
|---|----------------------|
| 1.  | Font |
| 2.  | Font Size |
| 3.  | Font Color |
| 4.  | Grow Font |
| 5.  | Shrink Font |
| 6.  | Align Text Left |
| 7.  | Center |
| 8.  | Align Text Right |
| 9.  | Justify |
| 10.  | Text Highlight Color |

Q7. Application Based Question

1. After typing a letter in 12 point size, Rajni realized that the letter cross one page. What she should do to fit it in one page.

Ans. Change font size of letter.

2. Raman has typed a project report on solar system which contains information on various planets. Which font properties should he use?

Ans. Font, Font Color, Font Size.

3. Saima had prepared important notes on topic Environment yesterday and she saved it with a name. She wants to type more lines in a file today. But she does not know how to open a file again. Help her to open it.

Ans. Click File tab, Open option.

Q1. Following is the table that shows how much a family spends in one month.

	Father(₹)	Mother (₹)	Child 1(₹)	Child 2(₹)	Total(₹)
Transport	1200	800	500	500	
School fees	-----	-----	2485	2166	
Food and drinks	2000	1800	1200	1100	
Electricity and gas	1000	1000	-----	-----	
Other expenses	1580	1775	782	459	
Clothing and footwear	1852	2348	1240	938	
Doctor's bills/Medicines	-----	284	147	126	
Telephone	782	913	-----	-----	
Total					

Find out how much each member spends and the total of each type of expense. Also find the total expense for the month and answer the following questions.

- How much more does the mother spend than the father?
- Which child spends more and by how much?
- What is the total school fees paid?
- What is the amount spent on doctor 's bills and medicine?

Q2. Convert the following into paise.

- ₹9
- ₹15
- ₹39.5
- ₹28.50

Q 3. Convert the following into rupees.

- 1325 p
- 1875 p
- 150 p
- 6150 p
- 375 p

Q4. Add the following.

- ₹34.25 and ₹10.75
- ₹123.65 + ₹30.75 + ₹677.999

Q5. Subtract the following.

- ₹64.22 from ₹881.66
- ₹637.04 from ₹888.66

Q6. Multiply the following.

- ₹55.77 by 9
- ₹340.72 by 5
- ₹505.22 by 7
- ₹220.10 by 8

Q 7. Divide the following .

- ₹972.90 by 6
- ₹655.8 by 5
- ₹322.12 by 9
- ₹444.13 by 7

Q8. Statement sums:-

- The cost of 1 litre of petrol is ₹82.30 . What is the cost of 8 litres of petrol?
- Divide ₹75.50 into 5 equal parts . How much is each part get?

Ch- Measurement of mass

Q 1. Read the recipe given below carefully and complete the steps.

1. Ask your mother to chop the 50 g apple, 50 g cucumber, 50 g boiled potato, and 2 bananas (100 g).

$$\underline{\hspace{2cm}} \text{ g} + \underline{\hspace{2cm}} \text{ g} + \underline{\hspace{2cm}} \text{ g} + \underline{\hspace{2cm}} \text{ g} = \underline{\hspace{2cm}} \text{ g}$$

2. Take all the chopped things in a big bowl. Mix 12 grapes (40 g), 50 g Moong sprouts, and 40 g roasted peanuts to it.

$$\underline{\hspace{2cm}} \text{ g} + \underline{\hspace{2cm}} \text{ g} + \underline{\hspace{2cm}} \text{ g} + \underline{\hspace{2cm}} \text{ g} = \underline{\hspace{2cm}} \text{ g}$$

3. Add 10 ml lemon juice and 10 ml honey. Mix well.

4. Add 15 g salt and 5 g black pepper as per taste to the salad and mix it once more. Your tasty fruit salad is ready.

$$\underline{\hspace{2cm}} \text{ g} + \underline{\hspace{2cm}} \text{ g} + \underline{\hspace{2cm}} \text{ g} + \underline{\hspace{2cm}} \text{ g} = \underline{\hspace{2cm}} \text{ g}$$

Q2. Fill in the blanks:-

- _____ is the bigger unit of weight.
- _____ is the smaller unit of weight.
- 1 Kg = _____ g
- To convert kg into g, we multiply by _____.
- To convert g into kg, we divide by _____.
- 7000 grams are equal to _____ kg.
- The weight of a car is measured in the unit called _____.
- 5 kg is equal to _____ grams.
- Weight of a birthday cake is in kg or g. _____

Q2. Convert the following into grams.

- a) 3 kg b) 8 kg c) 9 kg d) 2 kg 200 g

Q3. Convert into kilogram.

- a) 4000 g b) 3000 g c) 9000 g d) 2000 g

Q4. Find the sum.

- a) 9 kg 302 g and 5 kg 417 g b) 23 kg 815 g and 7 kg 715 g

Q5. Subtract the following.

- a) 549 kg 32 g from 678 kg 32 g b) 9 kg 614 g from 23 kg 40 g

Q6. Statement sums.

- Suresh weighs 65 kg 600 g and Karan weighs 55 kg 725 g. Find their total weight.
- A shopkeeper had 90 kg 500 g wheat in stock. On a particular day, he sold 18 kg 900 g. How much wheat is left with him?
- An empty tin of ghee weighs 2 kg 450 g. When it is filled with ghee, it weighs 17 kg 850 g. How much ghee it contains?

BCM Sen . Sec .School, Basant city, Ludhiana

E.V.S – Assignments (Ch- 12 , 13,14)

STD –III (2019 – 2020)

Q1. Give one word answer :-

- (a) Which houses are commonly found in Assam ?
_____.
- (b) Name the house that cannot be moved ?
_____.
- (c) What is the other name of Rangoli in east India ?
_____.
- (d) Which instrument is used to find directions ?
_____.
- (e) What is the other name of earth ?
_____.

Q 2. Fill in the blanks :-

- (a) A strong house is called _____.
- (b) Compass was invented by the _____.
- (c) The symbols used in the map are known as _____.
- (d) _____ should be thrown regularly to keep the house clean .
- (e) _____ is the main source of water .

Q 3. True / false

- (a) A kuchchahouse is made with mud and straw.
- (b) Bungalows are multi-storeyed buildings .
- (c) A map gives rough directions on paper .
- (d) Water in the seas and oceans is salty.
- (e) Water can be cleaned by frying

Q 4. Match the following :-

- | | |
|-----------------|----------------------------|
| (a) Irrigation | to show |
| (b) Depict | safe to drink |
| (c) Pest | supplying water to crops |
| (d) Pucca house | a harmful insect or animal |
| (e) Potable | A strong house |

Q 5. Circle the correct words :

- | | | |
|-------------|---------|---------|
| (a) Grems | Germs | Garms |
| (b) Painter | Pniater | Pinater |
| (c) saetch | seketh | sketch |
| (d) flter | filter | felter |
| (e) Pond | Puda | pand |

Q6. Answer the following questions:-

- How does water get dirty ?
- What are multistoreyed buildings and Why are they useful ?
- How does the sun help us in finding directions?
- What are the main sources of water in your locality?
- What are pucca houses made of ? Give an example of a pucca house?

Q 7.HOTS :-

- Why do we mostly find pests in and around the kitchen and bathroom?
- Why should we wash our hands before cooking ?

Q :- 8 V.B.Q

- There are many flies and cockroaches around Rajni's House. Rajni's aunt Sunita always throws garbage on the road . What should Rajni do ?
- Why should we eat at least one meal in a day with our family?

Q:-9 Identify the Pictures:-



(a)



(b)



(c)

Q :-10 Draw any two road signs .

Assignment No:2 (खंड-क)

प्र.1- पदित काव्यांश पढ़कर प्रश्नों के उत्तर लिखें:-
घटता-बढ़ता रोज किसी दिन ऐसा भी करता है,
नहीं किसी की आँखों को तू, दिखलाई पड़ता है।
अब तू ही बता, नाप तेरी किस रोज़ लिवारें,
सी दे एक झिंगोला, जो हर रोज़ बदन में आए।

(क) रोज़ घटता-बढ़ता है -

तारा सूरज चाँद

(ख) हर रोज़ बदन में आए -

सूट झिंगोला पजामा

(ग) कविता का नाम है -

नन्हें बच्चे चाँद की साड़ी चाँद का कुत्ता

(घ) पंक्ति पूरी करो -

नहीं किसी की _____ को तू दिखलाई पड़ता है।

माँ नानी आँखों

प्र.2- सही शब्द चुनकर लिखें:- (खंड-ख)

ठिठूरकर ठिठुरकर ठीठुरकर

बहुमूल्य बहुमूल्य बहुमूल्य

प्र.3- शब्द-अर्थ (i) विशाल (ii) बदन (iii) उत्साह

प्र.4- बहुविकल्पीय प्रश्न (MCQ)

(क) एक बुढ़िया रहती थी -

महल में झोंपड़ी में बंगले में

(ख) सड़े हुए पदार्थ को मसलकर बनाई जाती थी -

क्रीम लुगदी दवाई

(ग) इस्लाम धर्म को मानने वाले दो बार त्यौहार मनाते

हैं - ईद का पोंगल का दीपावली का

प्र. 5- सही/गलत (✓/X) बताएँ-

(क) पेड़ के नीचे एक बंदर बैठा था। □

(ख) सभी त्यौहार हमें एकता का संदेश देते हैं। □

प्र. 6- खाली स्थान भरें-

संकेत-(पौंगल, लकड़ी)

(i) कुछ दिनों बाद — के टुकड़े सड़ जाते हैं।

(ii) तामिलनाडु का — त्यौहार तो पूरे भारत में प्रसिद्ध है।

प्र. 7- उचित मिलान करें-

(i) ईद जाड़े का

(ii) दशहरा मुस्लमान

(iii) मौसम हिंदु

प्र. 8- प्रश्न/उत्तर -

(क) शेर कहाँ जा छुपा ?

(ख) 'क्रिसमस' किसे कहा जाता है ?

(खंड-ग)

प्र. 9- लिंग बदलो - शेर, बूढ़ा, बंदर

प्र. 10- वचन बदलो - गवाला, यात्रा, बूढ़ा

प्र. 11- विलोम शब्द - दिन, बच्चा, छोटा

प्र. 12- अनेक शब्दों के लिए एक शब्द -

(i) मौस खाने वाला -

(ii) जो ईश्वर में विश्वास न रखता हो -

प्र. 13- क्रिया शब्दों को रेखांकित करें-

(i) रमेश पानी पी रहा है।

(ii) रानी अखबार पढ़ रही है।

(खंड-घ)

प्र. 14- निबंध - दीपावली (या) श्री गुरु नानक देवजी

प्र. 15- बीमारी की छुट्टी के लिए आवेदन पत्र ।

जुर्माना माफ़ी के लिए आवेदन पत्र ।

Assignment - 2

1. ਜੇਹੇ ਲਿਖਿਆ ਮਸ਼ਹੂਰੀ ਪੇਰੁ ਖੜ ਵੇ ਪੁਸ਼ਨਾਂ ਦੇ ਉੱਤਰ ਦਿਉ:-
ਸ੍ਰੀ ਗੁਰੂ ਨਾਨਕ ਦੇਵ ਜੀ ਸਿੱਖਾਂ ਦੇ ਪਹਿਲੇ ਗੁਰੂ ਮਨ। ਆਪ ਜੀ
ਦਾ ਜਨਮ 15 ਅਕਤੂਬਰ 1469 ਈ: ਨੂੰ ਗਏ ਭੋਇ ਦੀ ਤਲਵੰਡੀ
(ਪਾਕਿਸਤਾਨ) ਵਿੱਚੋਂ ਹੋਇਆ। ਆਪ ਜੀ ਦੇ ਪਿਤਾ ਦਾ ਨਾਂ ਮਹਿਤਾ
ਵਾਲੂ ਤੇ ਮਾਤਾ ਦਾ ਨਾਂ ਤ੍ਰਿਪਤਾ ਦੇਵੀ ਸੀ। ਬੇਬੇ ਨਾਨਕੀ ਆਪ
ਜੀ ਦੀ ਵੱਡੀ ਭੈਣ ਸੀ। ਗੁਰੂ ਨਾਨਕ ਦੇਵ ਜੀ ਨੇ ਮਨੁੱਖੀ ਤਲਾਈ
ਲਈ ਆਪਣਾ ਜੀਵਨ ਆਖਣ ਕੀਤਾ।

ਪ੍ਰ1- ਸ੍ਰੀ ਗੁਰੂ ਨਾਨਕ ਦੇਵ ਜੀ ਦਾ ਜਨਮ ਕੌਣੇ ਹੋਇਆ?

ਪ੍ਰ2- ਸ੍ਰੀ ਗੁਰੂ ਨਾਨਕ ਦੇਵ ਜੀ ਸਿੱਖਾਂ ਦੇ ਕਿੰਨੇ ਗੁਰੂ ਮਨ?

ਪ੍ਰ3- ਸ੍ਰੀ ਗੁਰੂ ਨਾਨਕ ਦੇਵ ਜੀ ਦੇ ਪਿਤਾ ਜੀ ਦਾ ਕੀ ਨਾਂ ਸੀ?

ਪ੍ਰ4- ਬੇਬੇ ਨਾਨਕੀ ਕੌਣ ਮਨ?

ਪ੍ਰ5- ਸ੍ਰੀ ਗੁਰੂ ਨਾਨਕ ਦੇਵ ਜੀ ਨੇ ਕਿਸ ਲਈ ਆਪਣਾ ਜੀਵਨ ਆਖਣ
ਕੀਤਾ?

2. ਜੇਹਾਂ ਵਿੱਚੋਂ ਪੁਸ਼ਨਾਂ ਦੇ ਉੱਤਰ ਦਿਉ:-

ਪ੍ਰ1- ਕਿਹੜੇ ਮੈਂਬਰ ਨੇ ਬੱਚਿਆਂ ਨੂੰ ਲੁਕਣ-ਮੀਚੀ ਦੀ ਖੇਡ ਪਿਡਾਈ?

ਪ੍ਰ2- ਜਗਜੀਤ ਨੇ ਆਪਣੀ ਜਾਗ ਵਿੱਚੋਂ ਮਨ ਲਈ ਸੀ?

ਪ੍ਰ3- ਜਗਨੇਕ ਦੇ ਵਹਿਲੀਜ਼ ਟੱਪਣ 'ਤੇ ਕੀ ਹੋਇਆ?

ਪ੍ਰ4- ਪਾਈ ਦੀ ਭਰੀ ਬਾਲਟੀ 'ਤੇ ਗੇੜੇ ਦਾ ਭਰਿਆ ਟੁਕੜਾ ਕਿਸ ਗੱਲ
ਦੀ ਗਵਾਹੀ ਭਰਦੇ ਹਨ?

ਪ੍ਰ5- ਜਦੋਂ ਜਗਨੇਕ ਦੀ ਖਤਰੀ ਕੱਪੜੇ ਧੋਣ ਲੱਗੀ ਤਾਂ ਮਾਤਾ ਨੇ ਕੀ
ਕੀਤਾ?

3. ਜੇਹਾਂ ਵਿੱਚੋਂ ਸ਼ਬਦਾਂ ਨੂੰ ਟਾਕਾਂ ਵਿੱਚੋਂ ਟੁਕੜੇ:-

ਗੀਤ, ਚੁੰਨੀ, ਖੇਡ, ਦਰਦਾਜ਼ਾ, ਗੁਆਂਢੀ, ਸ਼ਗਨ

4. ਖਾਲੀ ਥਾਵਾਂ ਭਰੋ:-

ਸੰਕੇਤ:- [ਕਬੀਰੀ, ਤਿਆਗ, ਆਖਾਂ, ਸਾਇੰਸ, ਟੀਗਟਾਰ]

1. ਸੰਕੇਤ ਨੇ ਸਮਝ ਦੀਆਂ _____ ਖੋਜ ਕਰ ਲਈਆਂ।
2. ਗੁਣ ਉਨ੍ਹਾਂ ਦੇ ਅਗਲਾ ਪੀਰੀਅਡ _____ ਦਾ ਸੀ।
3. ਗੁਣ ਨੇ _____ ਜਾਣਾ ਸੀ।
4. ਆਖੀਂ _____ ਦੇ ਜੱਗ ਵਿੱਚ ਗੰਗ ਗੇ ਗਾਂ।
5. _____ ਨੂੰ ਆਪਣੇ ਕੰਮਾਂ ਨਹੀਂ ਚੰਦੀਆਂ।

5. m.c. 9 (ਬਹੁ-ਵਿਕਲਪੀ ਪ੍ਰਸ਼ਨ)

1. ਕਿਸੇ ਲੋਕ ਇਨ੍ਹਾਂ ਟੀਮਾਂ- ਭਰਮਾਂ ਨੂੰ ਛੱਡਦੇ ਜਾ ਰਹੇ ਹਨ?
ਪੱਤੂ ਆਪਣੇ ਪੜ੍ਹੇ-ਲਿਖੇ
2. ਆਪਣੇ ਇਕ ਕੁੱਤੇ ਨੇ ਕੀ ਕੀਤਾ ਸੀ?
ਕੰਨ ਛਿੜਕੇ ਸਨ ਡੇਰਿਆ ਸੀ ਡੇਰਿਆ ਸੀ
3. ਸਮਝ ਨੇ ਕਿਸ ਨੂੰ ਡੇਰਿਆ ਸੀ?
ਆਮਨ ਨੂੰ ਸਜੀਵ ਨੂੰ ਗਲੀਨ ਨੂੰ
4. ਖੱਬੇ ਲਾਹੜ - ਮੀਠੀ ਦੀ ਖੰਡ ਆਮ ਕਰਕੇ ਕਿੱਥੇ ਖੰਡੇ ਹਨ?
ਛੱਤਾਂ 'ਤੇ ਗਾਗਉਣ ਵਿੱਚ ਗਲੀ ਵਿੱਚ
6. ਹੇਠਾਂ ਦਿੱਤੇ ਸ਼ਬਦਾਂ ਦੇ ਵਿੱਠੀ ਸ਼ਬਦ ਲਿਖੋ:-

ਫੇਲੂ _____

ਕਾਗਲੀ _____

ਬੱਖ _____

ਪਿਛਾਂਗ _____

ਭਰੀ ਚੋਖੀ _____

ਆਪਣੇ _____

Simple Past Tense

Rule : Subject + Verb (2nd form) + Object

For eg:-
Suman went to the school.
↓ ↓ ↓
Subject V2 Object

A. Fill in the blanks with the Simple Past Tense form of the verb given in the brackets .

1. I _____ to the fair yesterday. (go / went)
2. The American team _____ the match. (won / win)
3. The bird _____ over the tree. (fly / flew)
4. Father _____ a new bicycle for me. (bought / buy)
5. She _____ us about the new book. (tell / told)
6. The cat _____ by the window. (sit / sat)
7. They _____ late to school today. (come / came)

B. Fill in the blanks with the Simple Past Tense form of the verb given in the box.

gave	bought	taught	lost	kept
------	--------	--------	------	------

1. Vani _____ this book yesterday.
2. My mother _____ history in my school.
3. The Indian team _____ the match.
4. We _____ alms to the poor and needy.
5. We _____ the sharp objects away from the baby's reach.

C. Describe in 5 lines the activities you like to do during your childhood.
(Use Simple Past Tense only)

1. _____
2. _____
3. _____
4. _____
5. _____

Prepositions

A. Circle the Prepositions:

1. The lion was sleeping under the bed.
2. The boys are sitting on the bench.
3. My credit card is in my purse.
4. Rahul is sitting between Sham and Ram.
5. Distribute the sweets among the children.
6. The girl is hiding behind the tree.

I am a Preposition.

I show the relation of nouns or pronouns with other words in a sentence.

B. Fill in the blanks with suitable Prepositions from the box:

in on under behind between among

1. Surabhi and Ananya divided sweets _____ themselves.
2. There is lot of dust _____ the sofa.
3. Distribute the mangoes _____ these five children.
4. She hid her doll _____ the pillow
5. The book is _____ the table.
6. They come to school _____ winter uniform.



C. Choose the correct preposition to complete each sentence:

1. They live in / on a big house.
2. Somya is sitting among / between her parents.
3. There is a wolf between / among sheeps.
4. What is this called in / on English?

D. Edit the following sentences and write the correct preposition.

1. What do you do on school?

2. What were you doing among 4 pm and 6 pm?

3. Sahil is sleeping between his bed.

4. He reached home on 8' o clock.
